





Level 1

For office use only														
A1	Individual questionnaire number							A2	Household questionnaire number					
A3	Household control sheet number							A4	Pcode from household roster					

1.  +  = 

- a) 
- b) 
- c) 
- d) 

2. $12 \div 3 =$

- a) 2
b) 3
c) 4
d) 5

3. $4 \times 7 =$

- a) 4
b) 7
c) 18
d) 28

4. If you count by 2 which number should go next ?/ Arali nit shi khou vhalela nga 2 ndi ifhio nomboro ine ya fanela u tevhela?

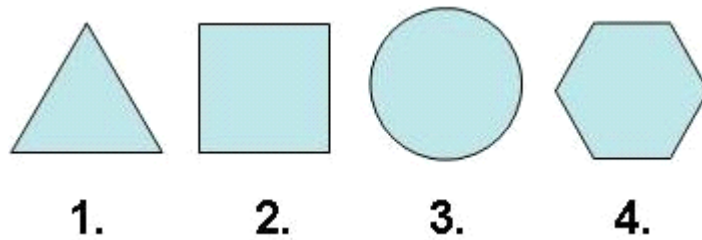
2 4 6 8 10 ?

- a) 10
b) 11
c) 12
d) 13

5. $16 \div 8 = 2$

- a) +
- b) -
- c) x
- d) \div

6. Which shape is the odd one out? / Ndi tshifhio tshivhumbeo tshi sa fani na zwiñwe?



- a) 1.
- b) 2.
- c) 3
- d) 4.

7. Which item is the cheapest? / Ndi tshifhio tshiteñwa tshi sa quri?



a) R1.80



b) R2.00



c) 0.90c



d) R5.00

8. What time is on the clock? / Ndi tshifhinga qe kha watshi?

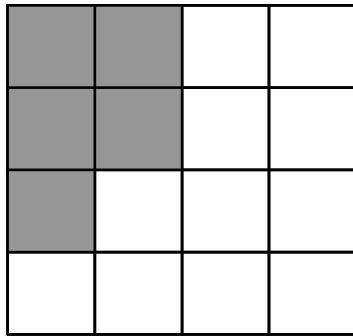


- a) 2
- b) 2:30
- c) 3
- d) 3:30

9. $1\text{cm} = ?$

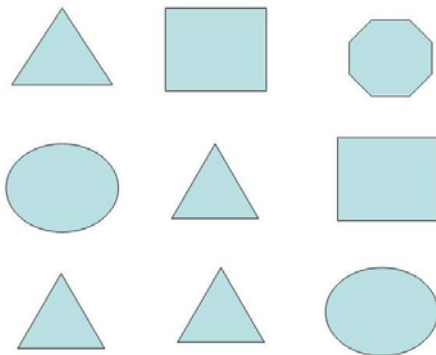
- a) 10 mm
- b) 100 mm
- c) 1000 mm
- d) 10000 mm

10. How many squares are shaded? / Ndi zwiikwea zwingana zwo swifhadzwaho?




- a) 2 out of 16/ 2 ra bvisa16
- b) 3 out of 16/ 3 ra bvisa16
- c) 4 out of 16/ 4 ra bvisa16
- d) 5 out of 16/ 5 ra bvisa16

11. How many triangles are in this figure? / Hu na tshofunderaru nngana kha itshi tshivhumbeo?




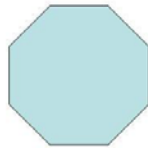
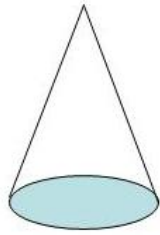
- a) 2
- b) 3
- c) 4
- d) 5

12. How many sides does this object have?/ Tshithu itshi tshi na matungo mangana?



- a) 4
- b) 5
- c) 6
- d) 7

13. Which shape makes base of the cone? / Ndi tshifio tshivhumbeo tshine tsha ita mutheo wa khounu



- a) b) c) d)

14. Which city had the hottest temperature? / Ndi ifhio dōrobo khulwane ine ya vha na thempharetsha ino fhisesa?

City/Dorobo khulwane	Temperature ° C/ Thempheretsha ° C
Cape Town	25
Johannesburg	24
Harare	20
Nairobi	22

- a) Cape Town
b) Johannesburg
c) Harare
d) Nairobi

15. How many of these numbers are greater than 6? / Ndi nngana dza nomboro idzi dzine dza vha khulwane kha 6?

2, 4, 6, 3, 8, 1, 11, 12

- a) 3
b) 4
c) 6
d) 7